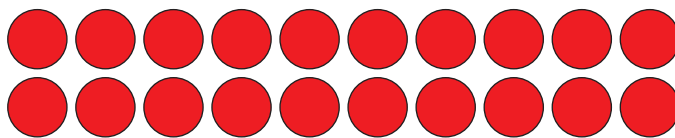




Rekenen met tientallen1. Vergelijk! Zie je het verschil?

$$3 + 2 = 5$$

$$30 + 20 = 50$$

$$5 + 3 = \underline{8}$$

$$7 + 3 = \underline{10}$$

$$6 + 3 = \underline{9}$$

$$50 + 30 = \underline{80}$$

$$70 + \underline{30} = \underline{100}$$

$$60 + \underline{30} = \underline{90}$$

$$4 + 2 = \underline{6}$$

$$8 - 3 = \underline{5}$$

$$10 - 4 = \underline{6}$$

$$40 + \underline{20} = \underline{60}$$

$$80 - \underline{30} = \underline{50}$$

$$100 - \underline{40} = \underline{60}$$

2. Vul de ontbrekende getallen in:

$$20 + \underline{50}$$

$$10 + \underline{70}$$

$$30 + \underline{40}$$

$$50 + \underline{20}$$

70

$$0 + \underline{80}$$

$$40 + \underline{40}$$

80

$$10 + \underline{60}$$

$$60 + \underline{10}$$

$$20 + \underline{60}$$

$$70 + \underline{10}$$

$$0 + \underline{70}$$

$$30 + \underline{50}$$

$$40 + \underline{70}$$

$$30 + \underline{20}$$

$$50 + \underline{80}$$

$$80 + \underline{40}$$

90

$$10 + \underline{40}$$

$$50 + \underline{0}$$

50

$$70 + \underline{60}$$

$$10 + \underline{10}$$

$$20 + \underline{30}$$

$$0 + \underline{50}$$

$$20 + \underline{50}$$

$$40 + \underline{10}$$

$$100 - \underline{60}$$

$$30 + \underline{30}$$

$$50 - \underline{10}$$

$$30 + \underline{10}$$

40

$$90 - \underline{30}$$

$$50 + \underline{10}$$

60

$$20 + \underline{20}$$

$$40 + \underline{0}$$

$$40 + \underline{20}$$

$$70 - \underline{10}$$

$$70 - \underline{30}$$

$$80 - \underline{20}$$