

Additions 0-4

1. Résous les opérations

$$\begin{array}{l} 1 + 0 = \boxed{1} \\ 3 + 1 = \boxed{4} \\ 2 + 1 = \boxed{3} \\ 4 + 0 = \boxed{4} \\ 0 + 1 = \boxed{1} \\ 1 + 3 = \boxed{4} \end{array}$$

$$\begin{array}{l} 2 + 2 = \boxed{4} \\ 3 + 0 = \boxed{3} \\ 0 + 2 = \boxed{2} \\ 1 + 3 = \boxed{4} \\ 1 + 1 = \boxed{2} \\ 2 + 1 = \boxed{3} \end{array}$$

$$\begin{array}{l} 1 + 0 = \boxed{1} \\ 3 + 1 = \boxed{4} \\ 2 + 1 = \boxed{3} \\ 4 + 0 = \boxed{4} \\ 0 + 1 = \boxed{1} \\ 1 + 3 = \boxed{4} \end{array}$$

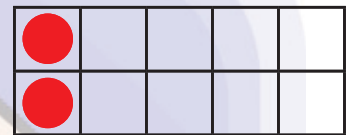
2. Résous les opérations et complète les points manquants dans le tableau.



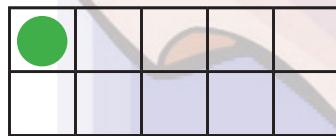
$$2 + 1 = \boxed{3}$$



$$1 + 1 = \boxed{2}$$



$$2 + 0 = \boxed{2}$$



$$0 + 1 = \boxed{1}$$

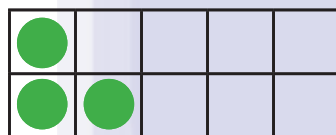


$$3 + 1 = \boxed{4}$$



$$4 + 0 = \boxed{4}$$

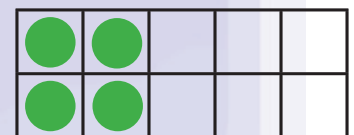
2. Résous les opérations et complète les points manquants dans le tableau



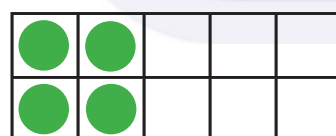
$$1 + 2 = \boxed{3}$$



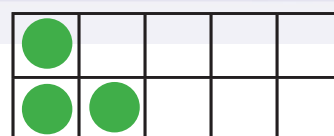
$$2 + 0 = \boxed{2}$$



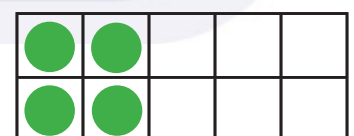
$$1 + 3 = \boxed{4}$$



$$4 + 0 = \boxed{4}$$



$$0 + 3 = \boxed{3}$$



$$2 + 2 = \boxed{4}$$