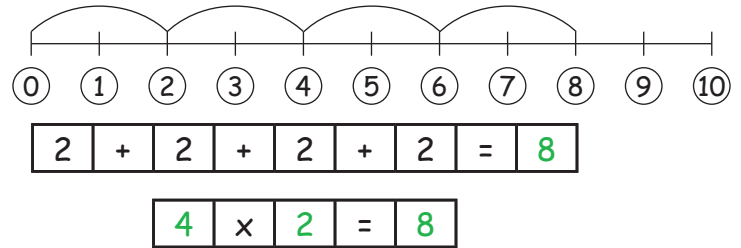
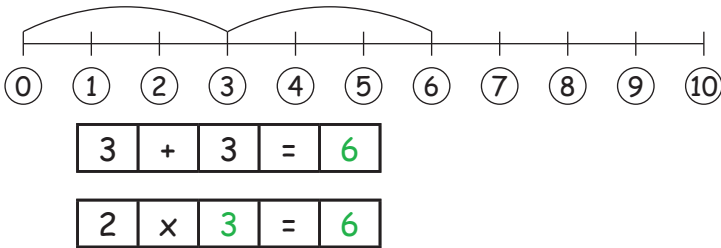




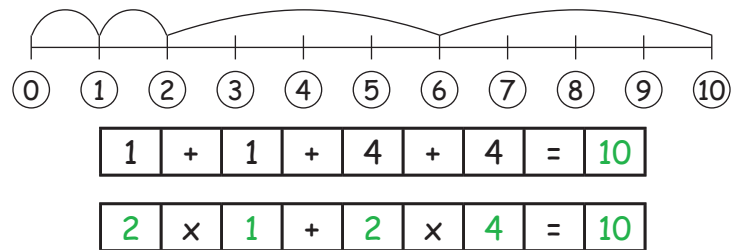
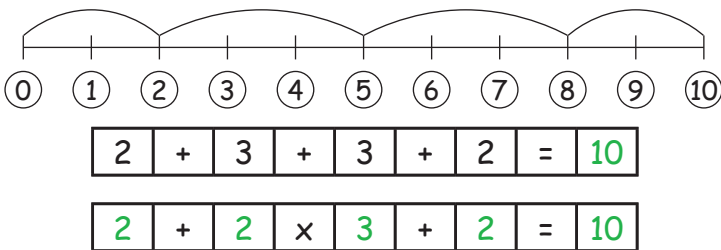
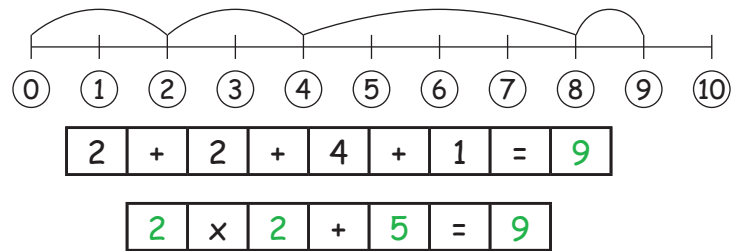
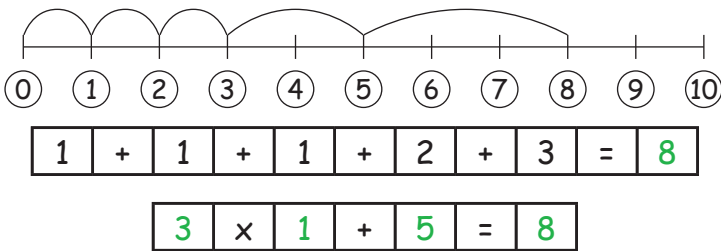
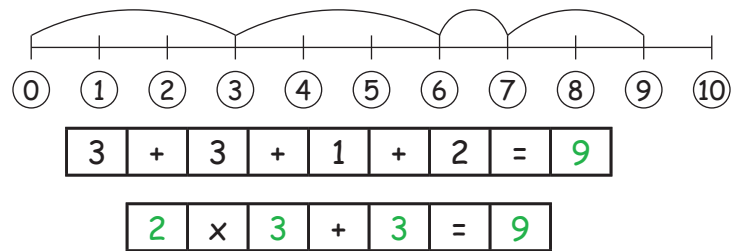
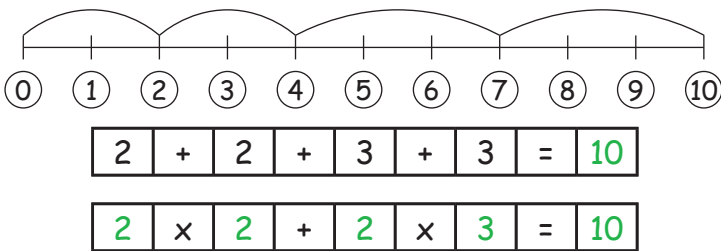
Getallenlijn tot 10

1. Maak van de optelsommen vermenigvuldigingen.

Neem de getallenlijn als hulpmiddel!



2. Vermenigvuldigen en optellen combineren:



3. Dezelfde uitkomsten zoeken:

Zoek bij elke uitkomst, de passende som uit de oplossingen, die dezelfde uitkomst heeft.

$2 \times 3 + 1 = 7$
 $3 \times 3 - 5 = 4$
 $4 \times 1 + 2 = 6$
 $5 \times 2 - 8 = 2$
 $2 \times 2 + 1 = 5$

$4 \times 2 - 1 = 7$
 $2 \times 5 - 6 = 4$
 $2 \times 4 - 2 = 6$
 $3 \times 2 - 4 = 2$
 $3 \times 3 - 4 = 5$

$3 \times 2 - 4 = 2$
 $3 \times 3 - 4 = 5$
 $2 \times 5 - 6 = 4$
 $4 \times 2 - 1 = 7$
 $2 \times 4 - 2 = 6$