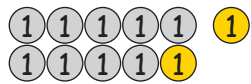



La dizaine inférieure1. Calcule les exemples en t'aidant de la monnaie.


$11 - 2 = \underline{9}$



$11 - 3 = \underline{8}$

$(11)^{-1} \rightarrow (10)^{-1} \rightarrow (9)$

$(11)^{-1} \rightarrow (10)^{-2} \rightarrow (8)$




$11 - 4 = \underline{7}$




$12 - 3 = \underline{9}$

$(11)^{-1} \rightarrow (10)^{-3} \rightarrow (7)$

$(12)^{-2} \rightarrow (10)^{-1} \rightarrow (9)$



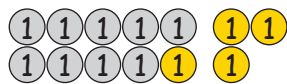
$12 - 4 = \underline{8}$




$12 - 5 = \underline{7}$

$(12)^{-2} \rightarrow (10)^{-2} \rightarrow (8)$

$(12)^{-2} \rightarrow (10)^{-3} \rightarrow (7)$



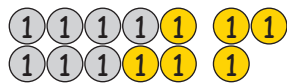
$13 - 4 = \underline{9}$




$13 - 5 = \underline{8}$

$(13)^{-3} \rightarrow (10)^{-1} \rightarrow (9)$

$(13)^{-3} \rightarrow (10)^{-2} \rightarrow (8)$




$13 - 6 = \underline{7}$




$14 - 5 = \underline{9}$

$(13)^{-3} \rightarrow (10)^{-3} \rightarrow (7)$

$(14)^{-4} \rightarrow (10)^{-1} \rightarrow (9)$




$14 - 6 = \underline{8}$



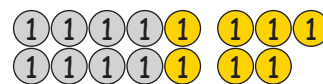
$14 - 7 = \underline{7}$

$(14)^{-4} \rightarrow (10)^{-2} \rightarrow (8)$

$(14)^{-4} \rightarrow (10)^{-3} \rightarrow (7)$




$15 - 6 = \underline{9}$



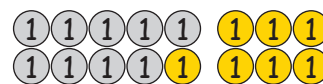
$15 - 7 = \underline{8}$

$(15)^{-5} \rightarrow (10)^{-1} \rightarrow (9)$

$(15)^{-5} \rightarrow (10)^{-2} \rightarrow (8)$



$15 - 8 = \underline{7}$




$16 - 7 = \underline{9}$

$(15)^{-5} \rightarrow (10)^{-3} \rightarrow (7)$

$(16)^{-6} \rightarrow (10)^{-1} \rightarrow (9)$



$16 - 8 = \underline{8}$



$16 - 9 = \underline{7}$

$(16)^{-6} \rightarrow (10)^{-2} \rightarrow (8)$

$(16)^{-6} \rightarrow (10)^{-3} \rightarrow (7)$