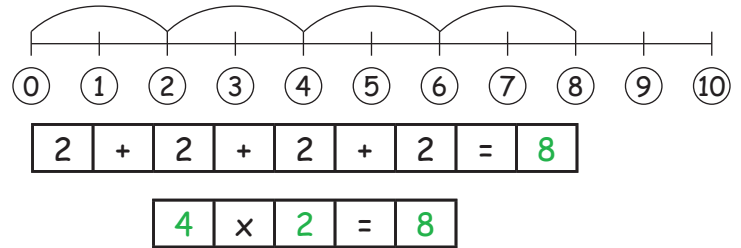
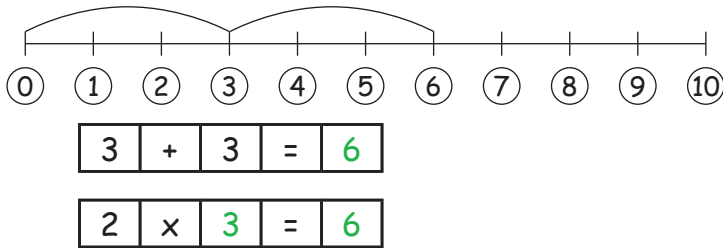
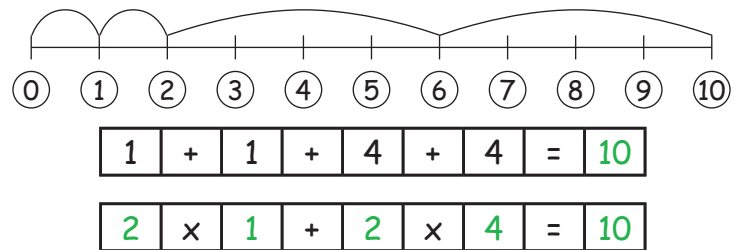
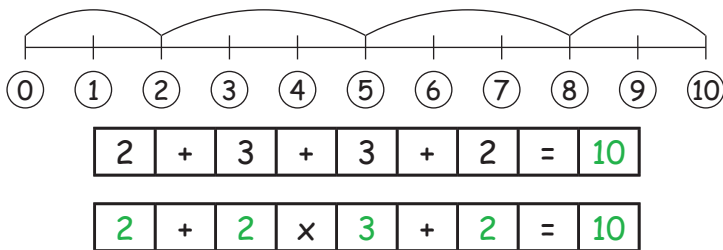
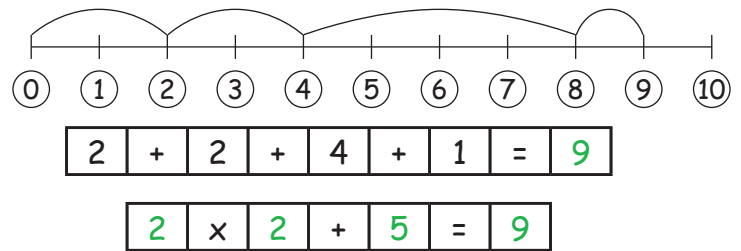
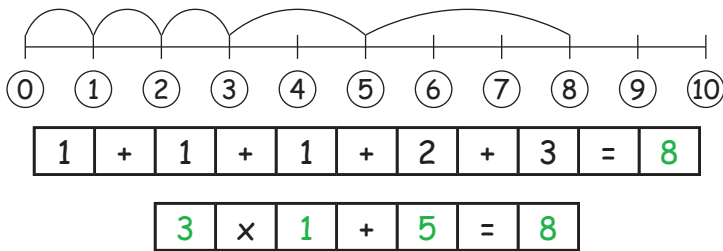
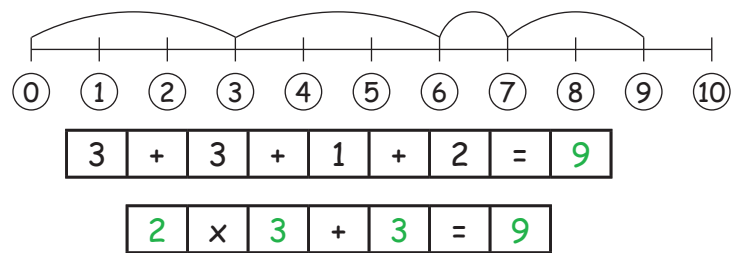
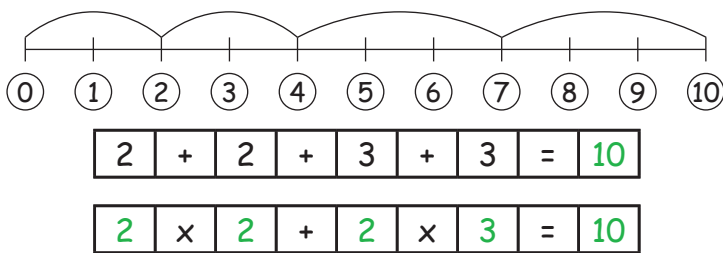


Les chiffres jusqu'à 10**1. Transforme les additions en multiplication.**

Aide-toi de l'échelle des chiffres !

**2. Combiner les additions et les multiplications :****3. D'autres exercices :**

Fais les calculs et, parmi les solutions, trouve l'opération ayant le même résultat.

$2 \times 3 + 1 = 7$

$4 \times 2 - 1 = 7$

$3 \times 3 - 5 = 4$

$2 \times 5 - 6 = 4$

$4 \times 1 + 2 = 6$

$2 \times 4 - 2 = 6$

$5 \times 2 - 8 = 2$

$3 \times 2 - 4 = 2$

$2 \times 2 + 1 = 5$

$3 \times 3 - 4 = 5$

$3 \times 2 - 4 = 2$

$3 \times 3 - 4 = 5$

$2 \times 5 - 6 = 4$

$4 \times 2 - 1 = 7$

$2 \times 4 - 2 = 6$