

Les unités du temps : heures - minutes

1. Compare les heures et les minutes :

En vélo, Luc met 1 heure pour aller de chez lui chez sa grand-mère.

Carine, pour le même trajet, met 60 minutes.

Lequel des 2 est le plus rapide ?

Aucun : ils mettent chacun le même temps.

2. Combien de minutes a une heure ?

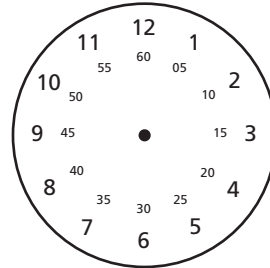
Une heure a 60 minutes.

Un quart d'heure a 15 minutes.


Trois quart d'heure ont 45 minutes.

Une demi-heure a 30 minutes.

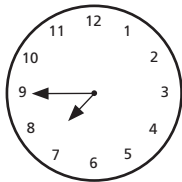
Une heure et demi a 90 minutes.



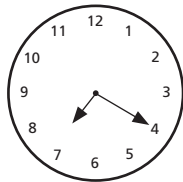
3. Combien de minutes se sont écoulées depuis 19 heures ? Inscris l'heure.




19H10




19H45



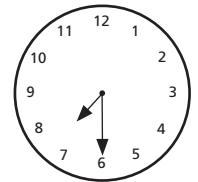
19H20



19H55



19H05

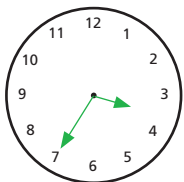


19H30

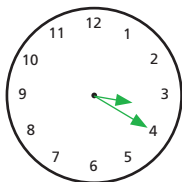
4. La radio a un affichage digital. Dessine les aiguilles sur les montres.

Pour chaque bonne réponse, tu marques 1 point.

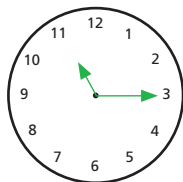
15 : 35



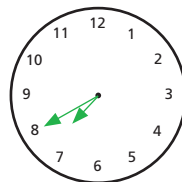
03 : 20



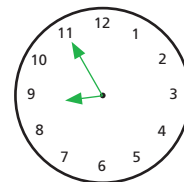
23 : 15



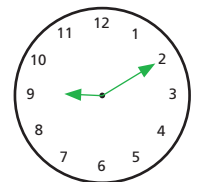
19 : 40



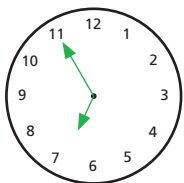
20 : 55



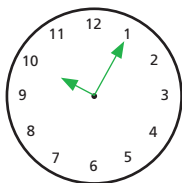
09 : 10



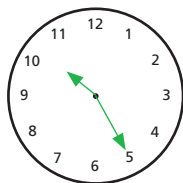
06 : 55



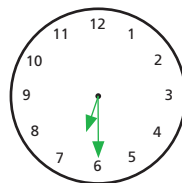
10 : 05



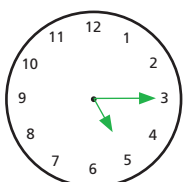
22 : 25



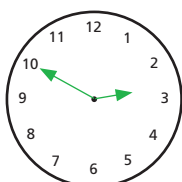
18 : 30



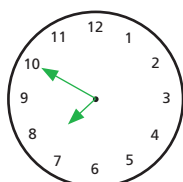
17 : 15



14 : 50



19 : 50



21 : 25

