

# Optellen 0-4

1. Los de sommen op.

$$\begin{array}{l} 1 + 0 = \boxed{1} \\ 3 + 1 = \boxed{\phantom{0}} \\ 2 + 1 = \boxed{\phantom{0}} \\ 4 + 0 = \boxed{\phantom{0}} \\ 0 + 1 = \boxed{\phantom{0}} \\ 1 + 3 = \boxed{\phantom{0}} \end{array}$$

$$\begin{array}{l} 2 + 2 = \boxed{\phantom{0}} \\ 3 + 0 = \boxed{\phantom{0}} \\ 0 + 2 = \boxed{\phantom{0}} \\ 1 + 3 = \boxed{\phantom{0}} \\ 1 + 1 = \boxed{\phantom{0}} \\ 2 + 1 = \boxed{\phantom{0}} \end{array}$$

$$\begin{array}{l} 1 + 0 = \boxed{\phantom{0}} \\ 3 + 1 = \boxed{\phantom{0}} \\ 2 + 1 = \boxed{\phantom{0}} \\ 4 + 0 = \boxed{\phantom{0}} \\ 0 + 1 = \boxed{\phantom{0}} \\ 1 + 3 = \boxed{\phantom{0}} \end{array}$$

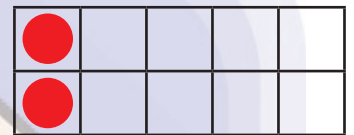
2. Los de sommen op en teken de ontbrekende stippen in de vakken.



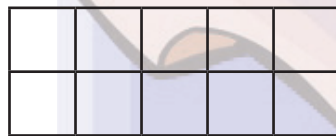
$$2 + 1 = \boxed{3}$$



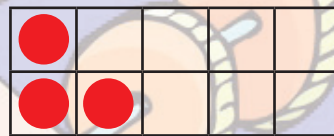
$$1 + 1 = \boxed{\phantom{0}}$$



$$2 + 0 = \boxed{\phantom{0}}$$



$$0 + 1 = \boxed{\phantom{0}}$$

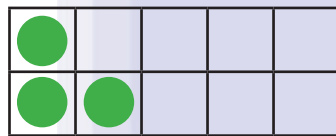


$$3 + 1 = \boxed{\phantom{0}}$$

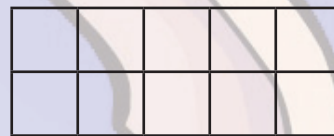


$$4 + 0 = \boxed{\phantom{0}}$$

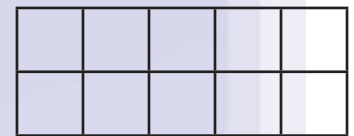
3. Los de sommen op en teken het juiste aantal stippen in de vakjes.



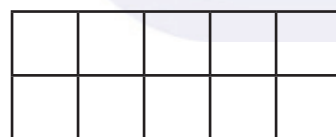
$$1 + 2 = \boxed{3}$$



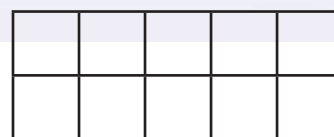
$$2 + 0 = \boxed{\phantom{0}}$$



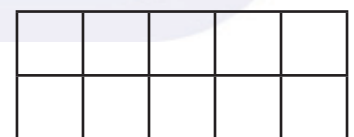
$$1 + 3 = \boxed{\phantom{0}}$$



$$4 + 0 = \boxed{\phantom{0}}$$



$$0 + 3 = \boxed{\phantom{0}}$$



$$2 + 2 = \boxed{\phantom{0}}$$