




Rekenen met tientallen

1. Vergelijk! Zie je het verschil?



$$3 + 2 = 5$$

$$30 + 20 = 50$$

$$5 + 3 = \underline{\quad}$$

$$7 + 3 = \underline{\quad}$$

$$6 + 3 = \underline{\quad}$$

$$50 + 30 = \underline{\quad}$$

$$70 + \underline{\quad} = \underline{\quad}$$

$$60 + \underline{\quad} = \underline{\quad}$$

$$4 + 2 = \underline{\quad}$$

$$8 - 3 = \underline{\quad}$$

$$10 - 4 = \underline{\quad}$$

$$40 + \underline{\quad} = \underline{\quad}$$

$$80 - \underline{\quad} = \underline{\quad}$$

$$100 - \underline{\quad} = \underline{\quad}$$

2. Vul de ontbrekende getallen in:

$$20 + \underline{\quad}$$

$$10 + \underline{\quad}$$

$$30 + \underline{\quad}$$

$$50 + \underline{\quad}$$

70

$$0 + \underline{\quad}$$

$$40 + \underline{\quad}$$

80

$$10 + \underline{\quad}$$

$$60 + \underline{\quad}$$

$$20 + \underline{\quad}$$

$$70 + \underline{\quad}$$

$$0 + \underline{\quad}$$

$$30 + \underline{\quad}$$

$$40 + \underline{\quad}$$

$$30 + \underline{\quad}$$

$$50 + \underline{\quad}$$

$$80 + \underline{\quad}$$

90

$$10 + \underline{\quad}$$

$$50 + \underline{\quad}$$

50

$$70 + \underline{\quad}$$

$$10 + \underline{\quad}$$

$$20 + \underline{\quad}$$

$$0 + \underline{\quad}$$

$$20 + \underline{\quad}$$

$$40 + \underline{\quad}$$

$$100 - \underline{\quad}$$

$$30 + \underline{\quad}$$

$$50 - \underline{\quad}$$

$$30 + \underline{\quad}$$

40

$$90 - \underline{\quad}$$

$$50 + \underline{\quad}$$

60

$$20 + \underline{\quad}$$

$$40 + \underline{\quad}$$

$$40 + \underline{\quad}$$

$$70 - \underline{\quad}$$

$$70 - \underline{\quad}$$

$$80 - \underline{\quad}$$