

## Cijfertabel 100

1. Reken eerst de sommen uit en schrijf dan met een rode pen de uitslagen in het veld over!

1	2	3	4	5	6	7	8	9	10
11	12	13	14	15	16	17	18	19	20
21	22	23	24	25	26	27	28	29	30
31	32	33	34	35	36	37	38	39	40
41	42	43	44	45	46	47	48	49	50
51	52	53	54	55	56	57	58	59	60
61	62	63	64	65	66	67	68	69	70
71	72	73	74	75	76	77	78	79	80
81	82	83	84	85	86	87	88	89	90
91	92	93	94	95	96	97	98	99	100



14 + 11 = \_\_\_\_\_

41 - 28 = \_\_\_\_\_

$\underbrace{4 \times 4} - 10 = \underline{\hspace{2cm}}$

34 + 40 = \_\_\_\_\_

50 - 33 = \_\_\_\_\_

$\underbrace{11 \times 5} + 6 = \underline{\hspace{2cm}}$

19 + 24 = \_\_\_\_\_

98 - 21 = \_\_\_\_\_

$\underbrace{8 \times 8} - 14 = \underline{\hspace{2cm}}$

14 + 0 = \_\_\_\_\_

64 - 17 = \_\_\_\_\_

$\underbrace{4 \times 3} + 7 = \underline{\hspace{2cm}}$

22 + 22 = \_\_\_\_\_

85 - 43 = \_\_\_\_\_

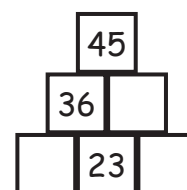
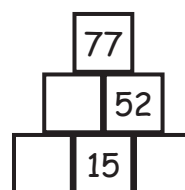
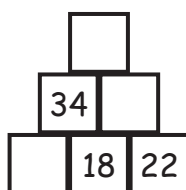
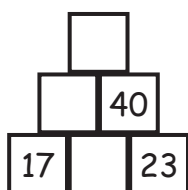
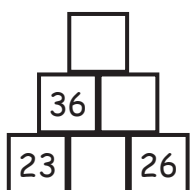
$\underbrace{7 \times 5} - 4 = \underline{\hspace{2cm}}$

39 + 36 = \_\_\_\_\_

99 - 42 = \_\_\_\_\_

$\underbrace{8 \times 6} + 3 = \underline{\hspace{2cm}}$

2. Vijf reketorens.



3. Een raadsel tot slot.

81 + 10 = _____	<b>E</b>
43 + 52 = _____	<b>A</b>
23 + 38 = _____	<b>T</b>

82 - 24 = _____	<b>V</b>
65 - 22 = _____	<b>E</b>
74 - 29 = _____	<b>A</b>

3 x 2 + 17 = _____	<b>I</b>
5 x 6 + 24 = _____	<b>N</b>
7 x 9 + 29 = _____	<b>T</b>

8 x 4 - 19 = _____	<b>K</b>
6 x 8 - 31 = _____	<b>G</b>
9 x 5 - 23 = _____	<b>T</b>

		43	92	61	23	17	91
P	R						

58	45	13	95	54	22		
						I	E