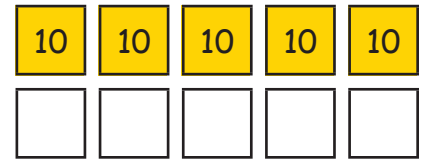
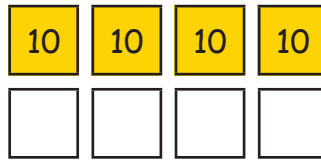
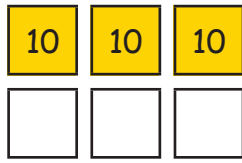



## Das Doppelte erkennen

### 1. Rechne das Doppelte:



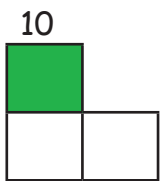
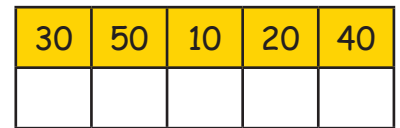
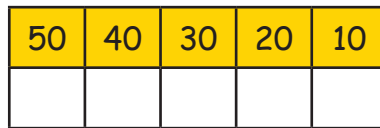
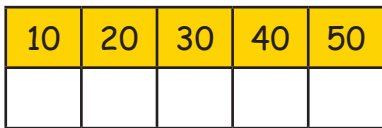
20 + 20 = \_\_\_

30 + 30 = \_\_\_

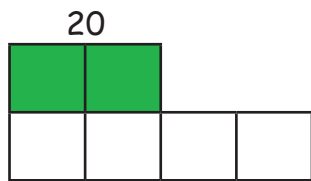
40 + 40 = \_\_\_

50 + 50 = \_\_\_

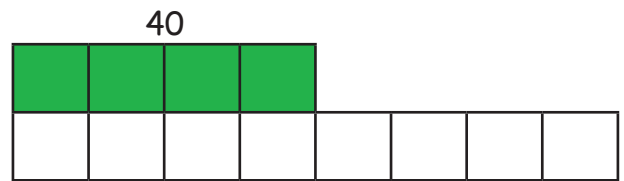
### 2. Bilde das Doppelte:



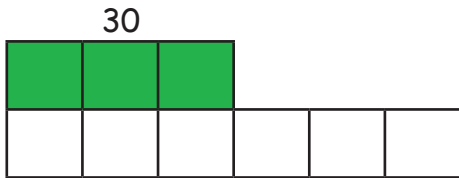
10 x 2 = \_\_\_



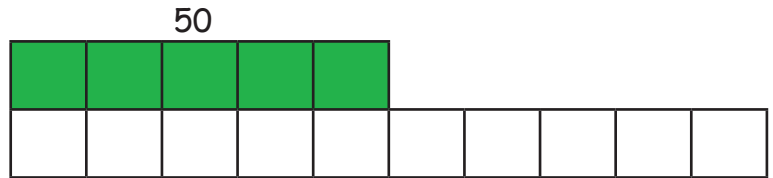
20 x 2 = \_\_\_



40 x 2 = \_\_\_



30 x 2 = \_\_\_



50 x 2 = \_\_\_

### 3. Zähle die Münzen und ergänze das Doppelte:

