

De **HOEVEELHEID** van 
 *het getal zes* 



Bedenk bij elke bloem een som!




$$\square + \square = \square$$



$$\square + \square = \square$$




$$\square + \square = \square$$



$$\square - \square = \square$$


$$\square - \square = \square$$



$$\square - \square = \square$$



$$\square - \square = \square$$



$$\square + \square = \square$$



$$\square + \square = \square$$