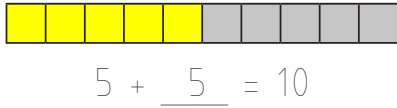
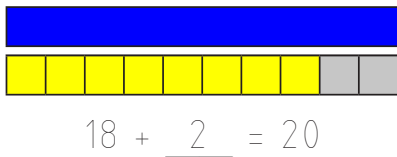
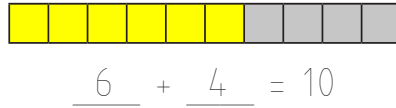


## Aanvullen tot 10 en 20

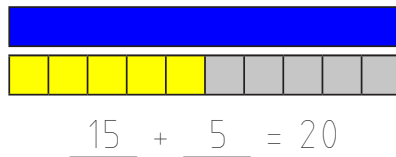
Kleur de lege vakjes in en vul de som eronder juist in!



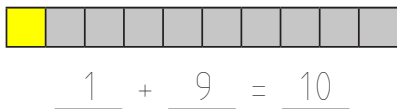
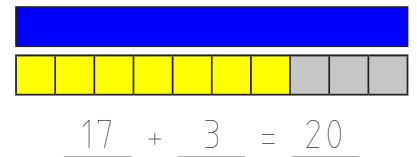
10



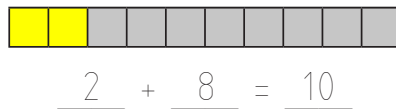
20



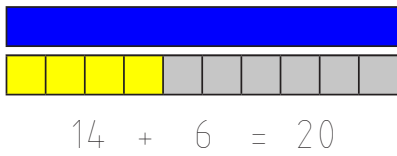
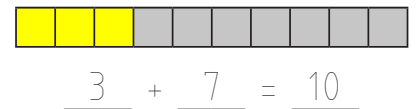
20



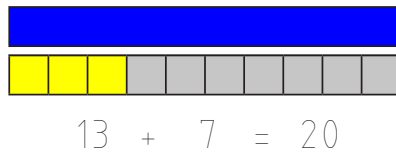
10



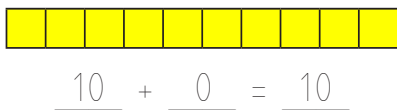
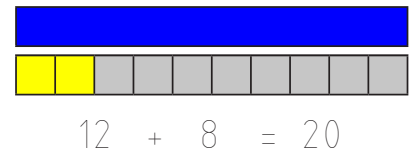
10



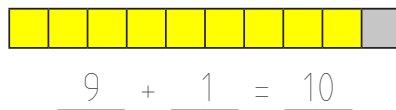
20



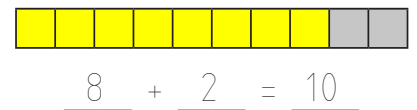
20



10



10



**Bereken:**

$2 + \underline{8} = 10$

$4 + \underline{6} = 10$

$6 + \underline{4} = 10$

$8 + \underline{2} = 10$

---

$12 + \underline{8} = 20$

$14 + \underline{6} = 20$

$16 + \underline{4} = 20$

$18 + \underline{2} = 20$

**Bereken:**

$1 + \underline{9} = 10$

$3 + \underline{7} = 10$

$5 + \underline{5} = 10$

$7 + \underline{3} = 10$

---

$11 + \underline{9} = 20$

$13 + \underline{7} = 20$

$15 + \underline{5} = 20$

$17 + \underline{3} = 20$

**Bereken:**

$0 + \underline{10} = 10$

$1 + \underline{9} = 10$

$9 + \underline{1} = 10$

$10 + \underline{0} = 10$

---

$0 + \underline{20} = 20$

$10 + \underline{10} = 20$

$19 + \underline{1} = 20$

$20 + \underline{0} = 20$

