




Aftrekken in de cijferruimte tot 61. Hoeveel blijft er over?


$$6 - 2 = \underline{4}$$




$$6 - 3 = \underline{3}$$




$$6 - 5 = \underline{1}$$




$$6 - 1 = \underline{5}$$




$$6 - 4 = \underline{2}$$




$$5 - 3 = \underline{2}$$




$$5 - 1 = \underline{4}$$




$$5 - 4 = \underline{1}$$




$$5 - 2 = \underline{3}$$




$$5 - 0 = \underline{5}$$




$$4 - 4 = \underline{0}$$




$$4 - 1 = \underline{3}$$



$$4 - 3 = \underline{1}$$




$$4 - 0 = \underline{4}$$




$$4 - 1 = \underline{3}$$

2. Omgekeerde sommen:


Reken eerst de optelsommen en daarna de aftreksommen uit. Valt je hierbij iets op?




$$4 + 2 = \underline{6}$$



$$3 + 3 = \underline{6}$$



$$1 + 5 = \underline{6}$$



$$2 + 4 = \underline{6}$$

$$6 - 2 = \underline{4}$$

$$6 - 3 = \underline{3}$$

$$6 - 5 = \underline{1}$$


$$6 - 4 = \underline{2}$$




$$2 + 3 = \underline{5}$$



$$4 + 1 = \underline{5}$$



$$3 + 2 = \underline{5}$$




$$1 + 4 = \underline{5}$$

$$5 - 3 = \underline{2}$$

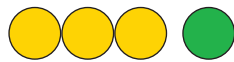
$$5 - 1 = \underline{4}$$

$$5 - 2 = \underline{3}$$


$$5 - 4 = \underline{1}$$




$$2 + 2 = \underline{4}$$



$$3 + 1 = \underline{4}$$



$$0 + 4 = \underline{4}$$




$$1 + 3 = \underline{4}$$

$$4 - 2 = \underline{2}$$


$$4 - 1 = \underline{3}$$

$$4 - 0 = \underline{4}$$

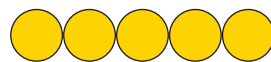
$$4 - 1 = \underline{3}$$



$$5 + 1 = \underline{6}$$



$$0 + 6 = \underline{6}$$



$$5 + 0 = \underline{5}$$



$$1 + 2 = \underline{3}$$

$$6 - 1 = \underline{5}$$

$$6 - 0 = \underline{6}$$

$$5 - 0 = \underline{5}$$

$$3 - 2 = \underline{1}$$