


## Cijfertabel 100

1. Reken eerst de sommen uit en schrijf dan met een rode pen de uitslagen in het veld over!

1	2	3	4	5	6	7	8	9	10
11	12	13	14	15	16	17	18	19	20
21	22	23	24	25	26	27	28	29	30
31	32	33	34	35	36	37	38	39	40
41	42	43	44	45	46	47	48	49	50
51	52	53	54	55	56	57	58	59	60
61	62	63	64	65	66	67	68	69	70
71	72	73	74	75	76	77	78	79	80
81	82	83	84	85	86	87	88	89	90
91	92	93	94	95	96	97	98	99	100



$14 + 11 = 25$

$34 + 40 = 74$

$19 + 24 = 43$

$14 + 0 = 14$

$22 + 22 = 44$

$39 + 36 = 75$

$41 - 28 = 13$

$50 - 33 = 17$

$98 - 21 = 77$

$64 - 17 = 47$

$85 - 43 = 42$

$99 - 42 = 57$

$4 \times 4 - 10 = 6$

$11 \times 5 + 6 = 61$

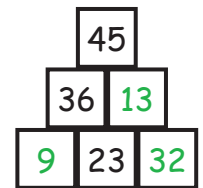
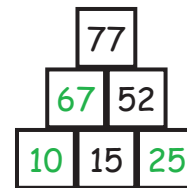
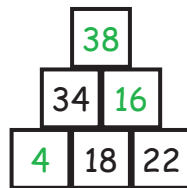
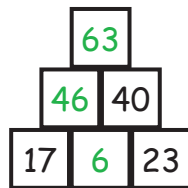
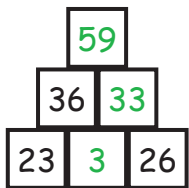
$8 \times 8 - 14 = 50$

$4 \times 3 + 7 = 19$

$7 \times 5 - 4 = 31$

$8 \times 6 + 3 = 51$

2. Vijf reketorens.



3. Een raadsel tot slot.

$81 + 10 = 91$	E
$43 + 52 = 95$	A
$23 + 38 = 61$	T

$82 - 24 = 58$	V
$65 - 22 = 43$	E
$74 - 29 = 45$	A

$3 \times 2 + 17 = 23$	I
$5 \times 6 + 24 = 54$	N
$7 \times 9 + 29 = 92$	T

$8 \times 4 - 19 = 13$	K
$6 \times 8 - 31 = 17$	G
$9 \times 5 - 23 = 22$	T

		43	92	61	23	17	91
P	R	E	T	T	I	G	E

58	45	13	95	54	22		
V	A	K	A	N	T	I	E