

Das Einmaleins mit 51. Einmaleins mit 5:

$1 \times 5 = \underline{5}$



$2 \times 5 = \underline{10}$



$3 \times 5 = \underline{15}$




$4 \times 5 = \underline{20}$




$5 \times 5 = \underline{25}$




$6 \times 5 = \underline{30}$




$7 \times 5 = \underline{35}$



$8 \times 5 = \underline{40}$



$9 \times 5 = \underline{45}$



$10 \times 5 = \underline{50}$

2. Trage nur die Zahlen der 5er Reihe ein:

				5					10
				15					20
				25					30
				35					40
				45					50

3. Welche Zahlen fehlen?

$\underline{4} \times 5 = 20$

$5 \times \underline{9} = 45$

$0 \times 5 = \underline{0}$

$4 \times 5 = \underline{20}$

$1 \times 5 = \underline{5}$

$\underline{3} \times 5 = 15$

$\underline{7} \times 5 = 35$

$\underline{0} \times 5 = 0$

$\underline{5} \times 5 = 25$

$4 \times 5 = \underline{20}$

$6 \times \underline{5} = 30$

$7 \times 5 = \underline{35}$

$5 \times \underline{6} = 30$

$\underline{8} \times 5 = 40$

$2 \times 5 = \underline{10}$

$5 \times \underline{5} = 25$

$8 \times 5 = \underline{40}$

$5 \times \underline{10} = 50$

$\underline{1} \times 5 = 5$

$9 \times \underline{5} = 45$