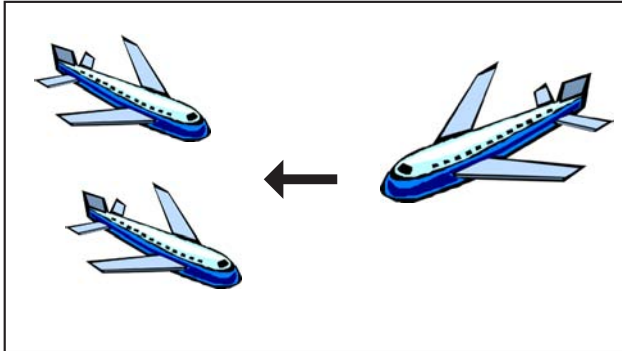
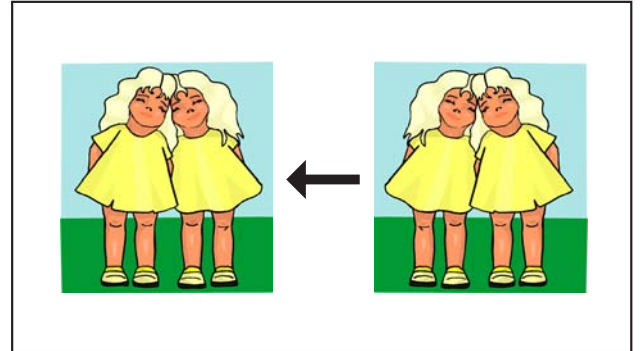


EEN REKENVERHAAL

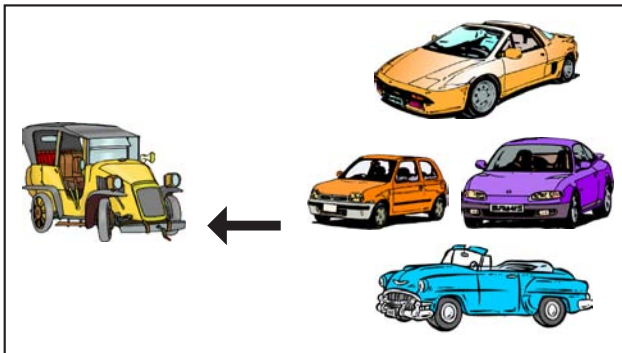
Vertel de rekenverhalen, doordat je de juiste cijfers onder de verhalen schrijft.



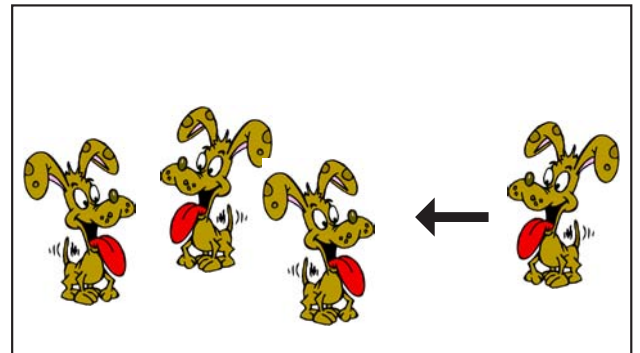
$$\boxed{2} + \boxed{1} = \boxed{3}$$




$$\boxed{2} + \boxed{2} = \boxed{4}$$



$$\boxed{1} + \boxed{4} = \boxed{5}$$



$$\boxed{3} + \boxed{1} = \boxed{4}$$



$$\boxed{1} + \boxed{1} = \boxed{2}$$

Nu is de situatie omgekeerd, probeer zelf een rekenverhaal te tekenen.



$$\boxed{2} + \boxed{1} = \boxed{3}$$