


Einzahl - Mehrzahl

Male in die Kästen:

eine Biene




drei Bienen



eine Blume




vier Blumen




eine Eule




zwei Eulen




ein Käfer




drei Käfer



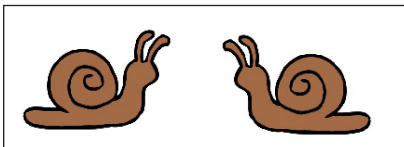




ein Schaf



zwei Schafe



Schreibe wie viele und welche Tiere im Kasten sind:

zwei Schneckeneine Schneckedrei Pferdeein Pferdvier Mäuseeine Maus