


Einzahl - Mehrzahl

Tekenen in de vakjes

eine Biene




drei Bienen



eine Blume




vier Blumen




eine Eule




zwei Eulen




ein Käfer




drei Käfer



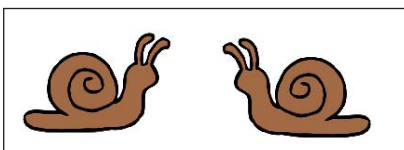




ein Schaf



zwei Schafe



Schrijf op hoeveel en welke dieren er in het vakje staan:

zwei Schneckeneine Schneckedrei Pferdeein Pferdvier Mäuseeine Maus