

Groot, groter, grootst

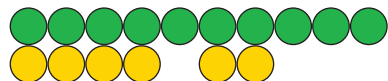
1. Optellen:



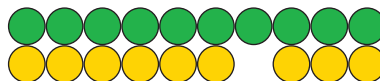
$4 + 2 = 6$



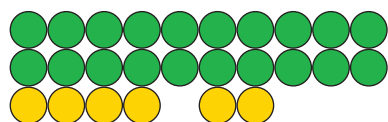
$6 + 3 = 9$



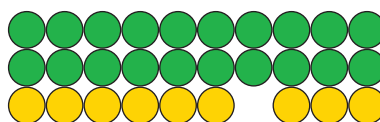
$14 + 2 = 16$



$16 + 3 = 19$



$24 + 2 = 26$




$26 + 3 = 29$




$3 + 5 = 8$



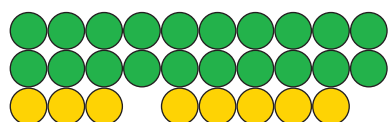
$3 + 4 = 7$



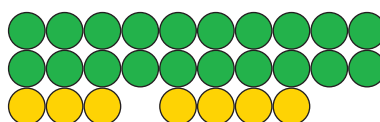
$13 + 5 = 18$



$13 + 4 = 17$



$23 + 5 = 28$



$23 + 4 = 27$

2. Aftrekken:




$8 - 3 = 5$



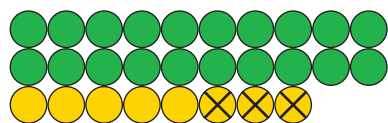
$7 - 6 = 1$



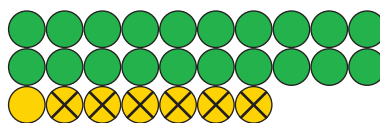
$18 - 3 = 15$



$17 - 6 = 11$



$28 - 3 = 25$



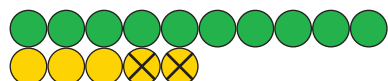
$27 - 6 = 21$




$5 - 2 = 3$



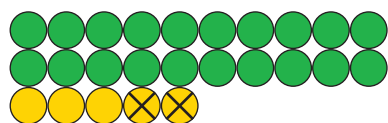
$6 - 4 = 2$



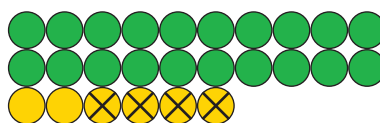
$15 - 2 = 13$



$16 - 4 = 12$



$25 - 2 = 23$



$26 - 4 = 22$