



Hoeveel moeten er nog bij?1. Vul de ontbrekende cijfers in:

$$5 + \underline{1} = 6$$



$$3 + \underline{1} = 4$$

2. Vul de ontbrekende cijfers in:

$$3 + \underline{1} = 4$$

$$2 + \underline{4} = 6$$

$$1 + \underline{1} = 2$$

$$2 + \underline{3} = 5$$

$$1 + \underline{4} = 5$$

$$3 + \underline{2} = 5$$

$$4 + \underline{2} = 6$$

$$1 + \underline{5} = 6$$

$$2 + \underline{1} = 3$$


$$1 + \underline{3} = 4$$

$$5 + \underline{0} = 5$$


$$3 + \underline{0} = 3$$

3. Hoeveel ogen ontbreken er nog?


$$2 + \underline{1} = 3$$




$$3 + \underline{2} = 5$$




$$1 + \underline{3} = 4$$



$$2 + \underline{4} = 6$$




$$1 + \underline{1} = 2$$




$$3 + \underline{2} = 5$$



$$2 + \underline{2} = 4$$



$$1 + \underline{2} = 3$$



$$3 + \underline{3} = 6$$