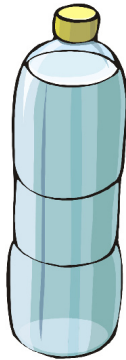


Meer of minder dan 1 liter

1. Meer of minder dan 1 liter?



minder




meer



minder



meer



meer



minder



meer




minder



meer





minder



meer

2. Omcirkel, waar je denkt, dat precies 1 liter in zit. Controleer dit daarna!



3. Meet nu zelf de inhoud van enkele verpakkingen!