

Negatieve getallen optellen en aftrekken

Geef de volgende rekenopgaven op de getallenlijn weer!



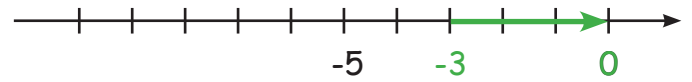
$$\underline{-6 + 3 = -3}$$



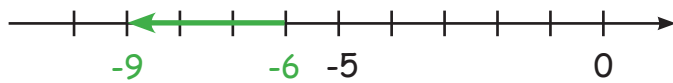
$$\underline{-9 + 5 = -4}$$



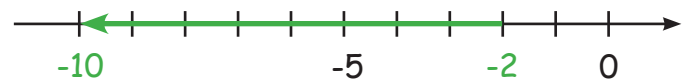
$$\underline{-4 - 4 = -8}$$



$$\underline{-3 + 3 = 0}$$



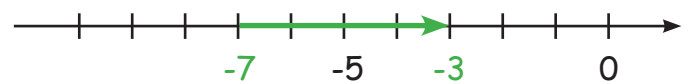
$$\underline{-6 - 3 = -9}$$



$$\underline{-2 - 8 = -10}$$



$$\underline{-8 + 4 = -4}$$



$$\underline{-7 + 4 = -3}$$

Schrijf de rekenopgaven, die op de getallenlijn worden weergegeven, op de lijnen!



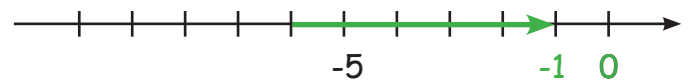
$$\underline{-9 + 7 = -2}$$



$$\underline{-1 - 8 = -9}$$



$$\underline{-2 - 5 = -7}$$



$$\underline{-6 + 5 = -1}$$



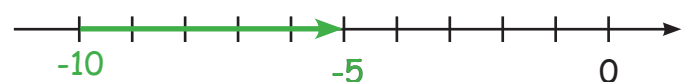
$$\underline{-6 + 5 = -1}$$



$$\underline{-4 - 2 = -6}$$



$$\underline{-5 + 3 = -2}$$








$$\underline{-10 + 5 = -5}$$

Negatieve getallen optellen en aftrekken

Bereken de opgaven! Voor elk goed antwoord, is er een letter voor de oplossing.

Vul ze in het oplossingsveld in!

- a.) $-4 + 6 = \underline{2}$ f.) $-14 + 13 = \underline{-1}$ k.) $-24 - 26 = \underline{-50}$
- b.) $-9 + 22 = \underline{13}$ g.) $-18 + 8 = \underline{-10}$ l.) $-27 + 32 = \underline{5}$
- c.) $-8 - 6 = \underline{-14}$ h.) $15 - 25 = \underline{10}$ m.) $-28 + 21 = \underline{-7}$
- d.) $9 - 17 = \underline{-8}$ i.) $12 - 24 = \underline{-12}$ n.) $32 - 35 = \underline{-3}$
- e.) $8 - 12 = \underline{-4}$ j.) $20 - 31 = \underline{-11}$ o.) $-36 + 42 = \underline{6}$
- p.) $-45 - 11 = \underline{-56}$



B	I	J	T	S	C	H	I	L	D	P	A	D	D	E	N
---	---	---	---	---	---	---	---	---	---	---	---	---	---	---	---