

Optellen 0-4

1. Los de sommen op.

$$\begin{array}{l} 1 + 0 = 1 \\ 3 + 1 = 4 \\ 2 + 1 = 3 \\ 4 + 0 = 4 \\ 0 + 1 = 1 \\ 1 + 3 = 4 \end{array}$$

$$\begin{array}{l} 2 + 2 = 4 \\ 3 + 0 = 3 \\ 0 + 2 = 2 \\ 1 + 3 = 4 \\ 1 + 1 = 2 \\ 2 + 1 = 3 \end{array}$$

$$\begin{array}{l} 1 + 0 = 1 \\ 3 + 1 = 4 \\ 2 + 1 = 3 \\ 4 + 0 = 4 \\ 0 + 1 = 1 \\ 1 + 3 = 4 \end{array}$$

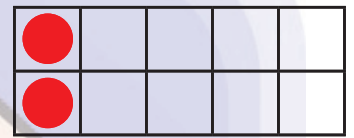
2. Los de sommen op en teken de ontbrekende stippen in de vakken.



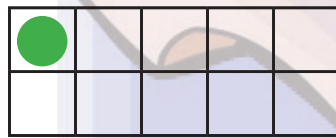
$$2 + 1 = 3$$



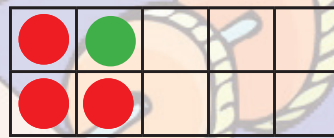
$$1 + 1 = 2$$



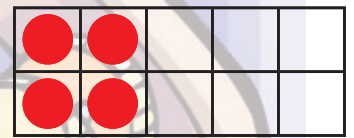
$$2 + 0 = 2$$



$$0 + 1 = 1$$

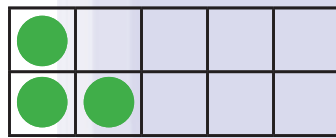


$$3 + 1 = 4$$



$$4 + 0 = 4$$

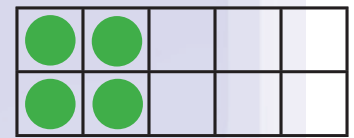
3. Los de sommen op en teken het juiste aantal stippen in de vakjes.



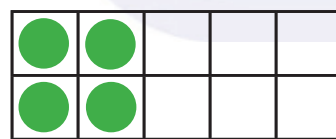
$$1 + 2 = 3$$



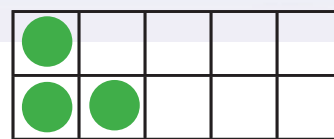
$$2 + 0 = 2$$



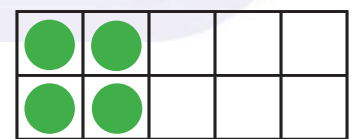
$$1 + 3 = 4$$



$$4 + 0 = 4$$



$$0 + 3 = 3$$



$$2 + 2 = 4$$