



Optellen en aftrekken in het cijfergebied tot 71. Vul de ontbrekende cijfers in:

Valt je hierbij iets op?




$$3 + 4 = \underline{7}$$

$$7 - 4 = \underline{3}$$




$$1 + 6 = \underline{7}$$

$$7 - 6 = \underline{1}$$




$$5 + 2 = \underline{7}$$

$$7 - 2 = \underline{5}$$




$$4 + 3 = \underline{7}$$

$$7 - 3 = \underline{4}$$




$$2 + 5 = \underline{7}$$

$$7 - 5 = \underline{2}$$



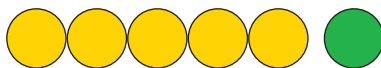
$$6 + 1 = \underline{7}$$

$$7 - 1 = \underline{6}$$



$$3 + 3 = \underline{6}$$

$$6 - 3 = \underline{3}$$




$$5 + 1 = \underline{6}$$

$$6 - 1 = \underline{5}$$



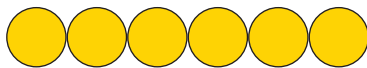
$$2 + 4 = \underline{6}$$

$$6 - 4 = \underline{2}$$



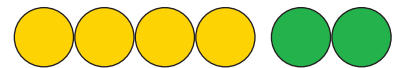
$$1 + 5 = \underline{6}$$

$$6 - 5 = \underline{1}$$



$$6 + 0 = \underline{6}$$

$$6 - 0 = \underline{6}$$




$$4 + 2 = \underline{6}$$

$$6 - 2 = \underline{4}$$




$$2 + 3 = \underline{5}$$

$$5 - 3 = \underline{2}$$



$$1 + 4 = \underline{5}$$

$$5 - 4 = \underline{1}$$



$$3 + 2 = \underline{5}$$

$$5 - 2 = \underline{3}$$




$$4 + 1 = \underline{5}$$

$$5 - 1 = \underline{4}$$



$$2 + 1 = \underline{3}$$

$$3 - 1 = \underline{2}$$



$$3 + 1 = \underline{4}$$

$$4 - 1 = \underline{3}$$