


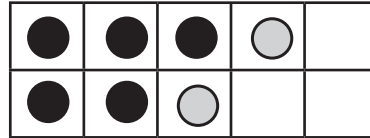
OPTELLEN MET GETALLEN TOT 10



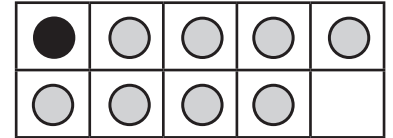
SCHRIJF HET ONTBREKENDE GETAL IN HET VAKJE EN TEKEN DE ONTBREKENDE CIRKELS IN DE TABEL.



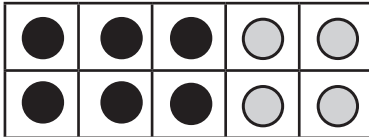
$$8 + \boxed{2} = 10$$



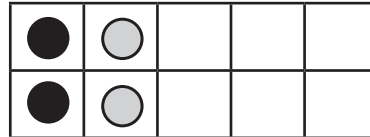
$$5 + \boxed{2} = 7$$



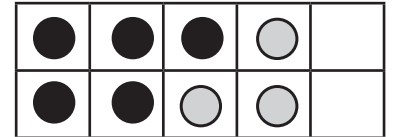
$$1 + \boxed{8} = 9$$



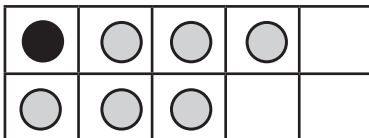
$$6 + \boxed{4} = 10$$



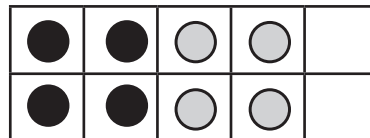
$$2 + \boxed{2} = 4$$



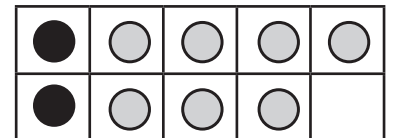
$$5 + \boxed{3} = 8$$



$$1 + \boxed{6} = 7$$



$$4 + \boxed{4} = 8$$



$$2 + \boxed{7} = 9$$

BEREKEN EN SCHRIJF DE UITKOMST IN HET VAKJE.

$$4 + 2 = \boxed{6}$$

$$4 + \boxed{3} = 7$$

$$\boxed{5} + 5 = 10$$

$$8 + 1 = \boxed{9}$$

$$2 + \boxed{2} = 4$$

$$\boxed{3} + 5 = 8$$

$$5 + 3 = \boxed{8}$$

$$3 + \boxed{0} = 3$$

$$\boxed{9} + 1 = 10$$

$$1 + 6 = \boxed{7}$$

$$6 + \boxed{4} = 10$$

$$\boxed{3} + 2 = 5$$

$$8 + 2 = \boxed{10}$$

$$5 + \boxed{4} = 9$$

$$\boxed{4} + 5 = 9$$