













Ordnen von Einer und Zehner

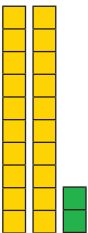


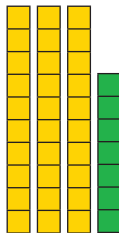
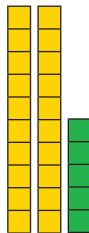

**1. Arbeiten mit Zehnerstreifen und Einerkästchen:**

Zähle die unten abgebildeten Zehnerstreifen und Einerkästchen. Schreibe dann die Zahl, die sich daraus ergibt, unten hin.

					
1 Z 5 E	1 Z 8 E	2 Z 3 E	2 Z 9 E	2 Z 1 E	1 Z 2 E
↓	↓	↓	↓	↓	↓
15	18	23	29	21	12

					
0 Z 7 E	1 Z 4 E	2 Z 6 E	2 Z 0 E	3 Z 4 E	3 Z 9 E
↓	↓	↓	↓	↓	↓
7	14	26	20	34	39

**2. Lese aus den Kästchen die Zahlen ab und schreibe sie unten hin:**

					
2 Z 2 E	2 Z 8 E	1 Z 4 E	3 Z 7 E	2 Z 5 E	1 Z 9 E
↓	↓	↓	↓	↓	↓
22	28	14	37	25	19