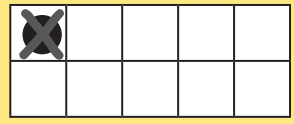

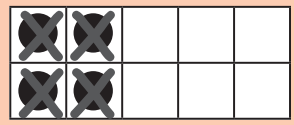
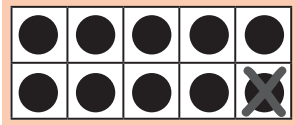


Overschrijding van de tientallen in het getallengebied 20

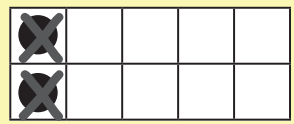
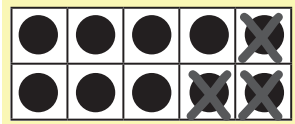
Streep de punten door en los de rekenopgaven op!



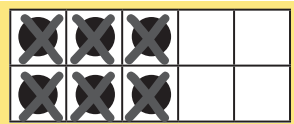
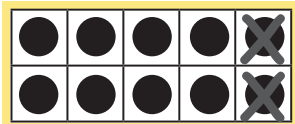
$11 - 2 = \underline{9}$



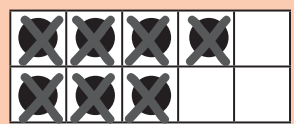
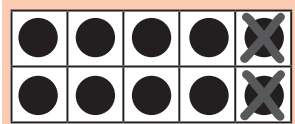
$14 - 5 = \underline{9}$



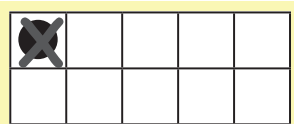
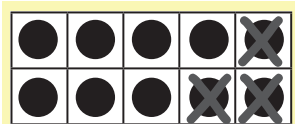
$12 - 5 = \underline{7}$



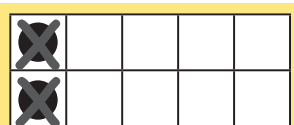
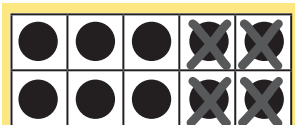
$16 - 8 = \underline{8}$



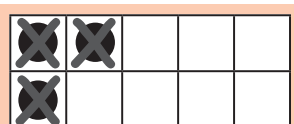
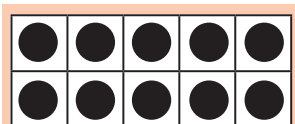
$17 - 9 = \underline{8}$



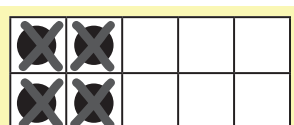
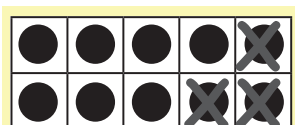
$11 - 4 = \underline{7}$




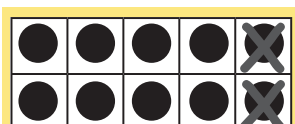
$12 - 6 = \underline{6}$



$13 - 3 = \underline{10}$



$14 - 7 = \underline{7}$



$12 - 4 = \underline{8}$