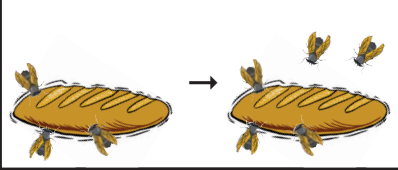
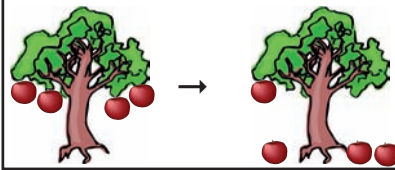
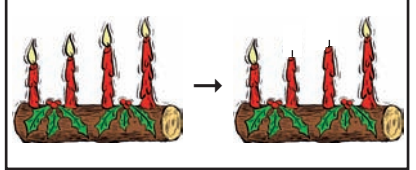



Rechengeschichten

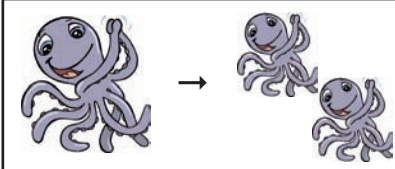
Setze die fehlenden Zahlen ein.


a) 
 $3 + \boxed{2} = 5$

b) 
 $\boxed{4} - 3 = 1$

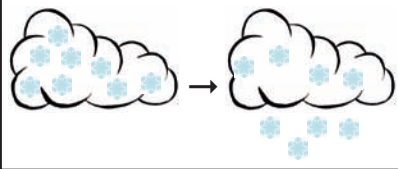
c) 
 $4 - \boxed{2} = 2$

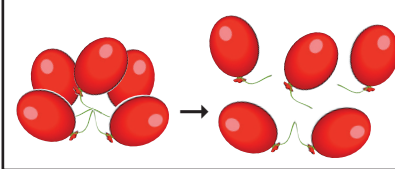
d) 
 $\boxed{5} + 4 = 9$

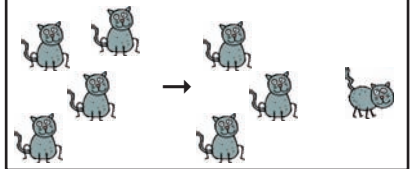
e) 
 $1 + \boxed{1} = 2$

f) 
 $\boxed{6} - 2 = 4$


Ergänze die fehlenden Zahlen anhand der Rechengeschichten.


a) 
 $\boxed{8} - \boxed{4} = 4$


b) 
 $\boxed{5} - \boxed{3} = 2$


c) 
 $\boxed{4} - \boxed{1} = 3$


Male eigene Rechengeschichten zu den Aufgaben.


a) 
 $4 - \boxed{1} = 3$

b) 
 $5 + \boxed{2} = 7$

c) 
 $7 - \boxed{3} = 4$

d) 
 $\boxed{3} - \boxed{3} = 0$

e) 
 $\boxed{6} - \boxed{3} = 3$

f) 
 $\boxed{0} + \boxed{5} = 5$