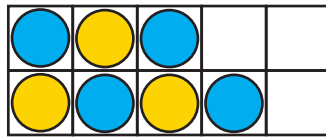
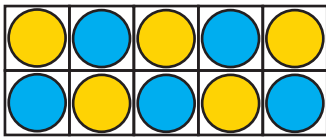


RECHNEN BIS 20

Wie viel Kreise fehlen, damit du genau 20 Stück hast?



$$17 + \boxed{3} = 20$$

1 Ergänze alle Rechnungen auf 20!

$$18 + \boxed{2} = 20$$

$$11 + \boxed{9} = 20$$

$$20 + \boxed{0} = 20$$

$$13 + \boxed{7} = 20$$

$$19 + \boxed{1} = 20$$

$$12 + \boxed{8} = 20$$

$$10 + \boxed{10} = 20$$

$$14 + \boxed{6} = 20$$

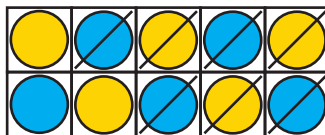
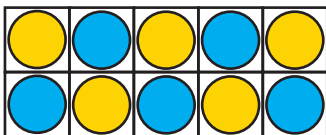
$$15 + \boxed{5} = 20$$

$$16 + \boxed{4} = 20$$

$$17 + \boxed{3} = 20$$

$$13 + \boxed{7} = 20$$

Wenn du 7 Kreise wegstreichst, wie viele Kreise bleiben dir dann noch?



$$20 - 7 = \boxed{13}$$

2 Nimm von 20 weg!

$$20 - 3 = \boxed{17}$$

$$20 - 10 = \boxed{10}$$

$$20 - 5 = \boxed{15}$$

$$20 - 9 = \boxed{11}$$

$$20 - 6 = \boxed{14}$$

$$20 - 7 = \boxed{13}$$

$$20 - 4 = \boxed{16}$$

$$20 - 8 = \boxed{12}$$

$$20 - 4 = \boxed{16}$$

$$20 - 2 = \boxed{18}$$

$$20 - 1 = \boxed{19}$$

$$20 - 6 = \boxed{14}$$