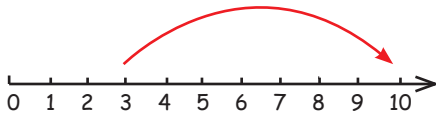
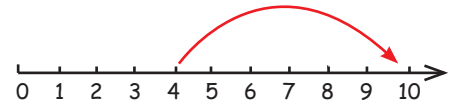


Rekenen op de getallenlijn

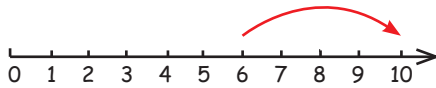

10



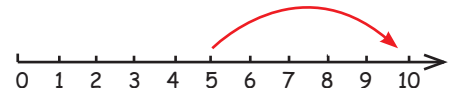
$$3 + \underline{7} = 10$$



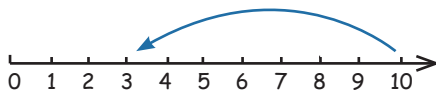
$$4 + \underline{6} = 10$$



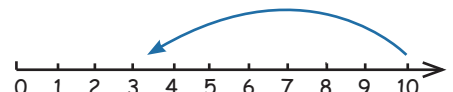
$$6 + \underline{4} = 10$$



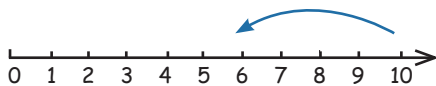
$$5 + \underline{5} = 10$$



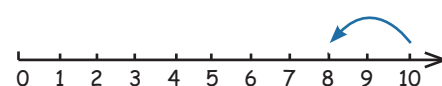
$$10 - \underline{8} = 2$$



$$10 - \underline{7} = 3$$



$$10 - \underline{4} = 6$$



$$10 - \underline{2} = 8$$