

Übungen bis 6


Vervollständige die Zeilen:

6 6 6 6 6 6


6 6 6 6 6 6

6 6 6 6 6 6 6 6 6 6 6 6 6 6

Bemale die Kästchen und löse die Rechnungen:




$5 + 1 = \underline{6}$



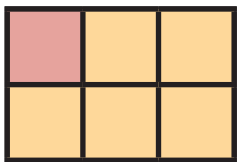
$4 + 2 = \underline{6}$



$2 + 4 = \underline{6}$




$3 + 3 = \underline{6}$



$1 + 5 = \underline{6}$




$0 + 6 = \underline{6}$




$6 + 0 = \underline{6}$




Schreibe die Anzahl in die Kästchen:




1




5




2



3



6



4