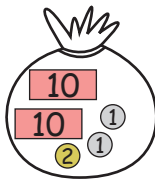

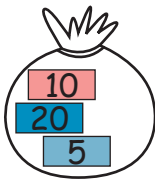



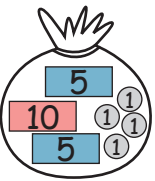







Vergelijk


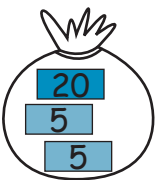
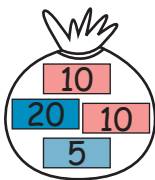


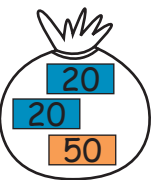

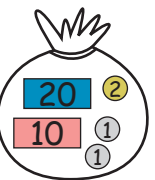
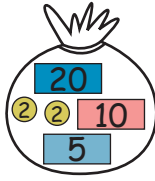

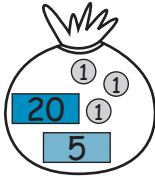


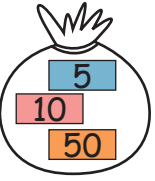
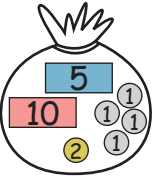
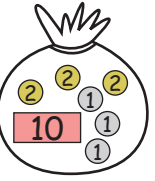
1. Is gelijk aan (=) of niet gelijk aan (≠)

							
<u>24</u> ≠ <u>26</u>	<u>35</u> = <u>35</u>	<u>65</u> = <u>65</u>	<u>24</u> ≠ <u>34</u>				

2. Welke vuurtoren is groter?

			
<u>2</u> < <u>4</u>	<u>5</u> > <u>3</u>		

3. Vergelijk de geldbedragen en vul de symbolen < (kleiner dan) of > (groter dan) in:

							
<u>25</u> < <u>30</u>	<u>45</u> > <u>40</u>	<u>85</u> < <u>90</u>	<u>24</u> < <u>34</u>				
							
<u>39</u> < <u>50</u>	<u>28</u> > <u>22</u>	<u>75</u> > <u>65</u>	<u>21</u> > <u>19</u>				

4. Vergelijk de getallen en vul de symbolen < (kleiner dan) of > (groter dan) in:

23 < 25	16 < 60	96 > 69	82 > 56	59 < 95
19 > 17	55 > 44	62 > 26	10 < 50	43 > 34
40 > 30	30 > 3	45 < 54	46 < 64	81 > 18
90 > 6	22 < 66	11 > 8	73 > 37	63 > 36