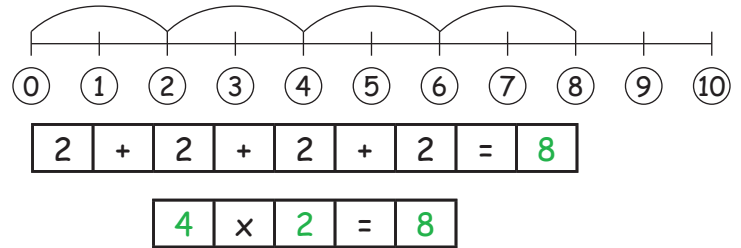
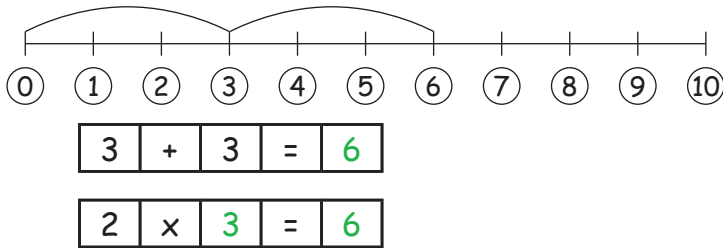




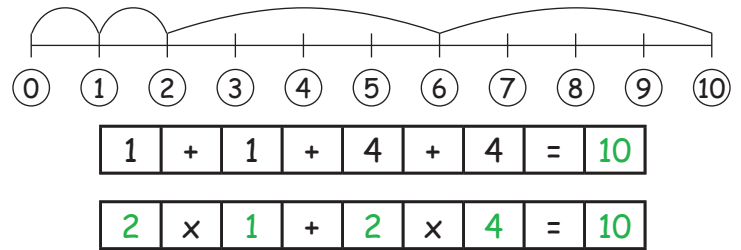
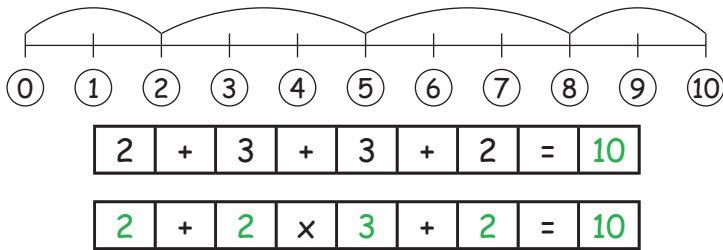
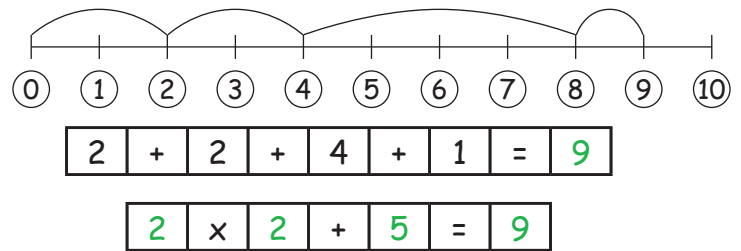
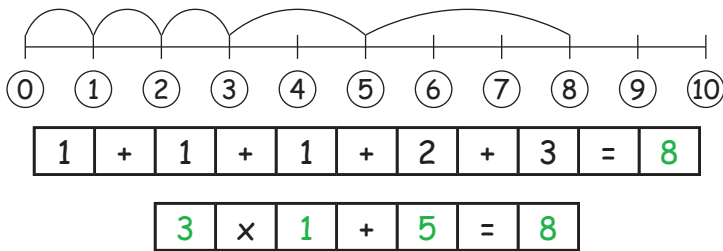
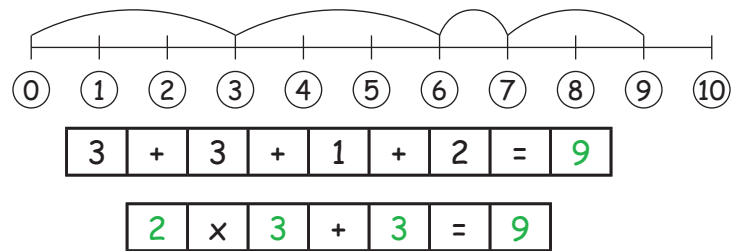
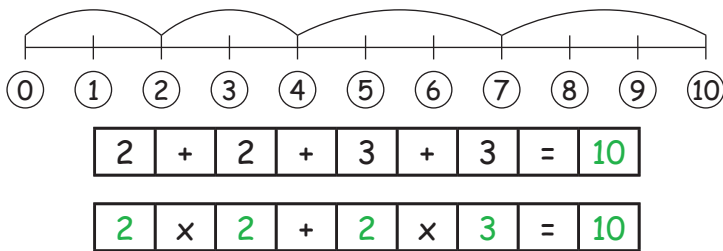
Zahlenstrahl bis 10

1. Mach aus den Plusrechnungen Malrechnungen.

Nimm den Zahlenstrahl als Hilfe!



2. Mal- und Plusrechnungen kombinieren:



3. Gleiche Lösungen finden:

Finde zu jeder Rechnung die passende Rechnung aus den Lösungen, die das gleiche Ergebnis hat.

- $2 \times 3 + 1 = 7$
- $3 \times 3 - 5 = 4$
- $4 \times 1 + 2 = 6$
- $5 \times 2 - 8 = 2$
- $2 \times 2 + 1 = 5$

- $4 \times 2 - 1 = 7$
- $2 \times 5 - 6 = 4$
- $2 \times 4 - 2 = 6$
- $3 \times 2 - 4 = 2$
- $3 \times 3 - 4 = 5$

- $3 \times 2 - 4 = 2$
- $3 \times 3 - 4 = 5$
- $2 \times 5 - 6 = 4$
- $4 \times 2 - 1 = 7$
- $2 \times 4 - 2 = 6$