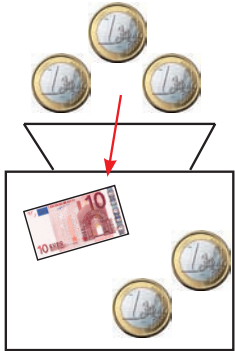
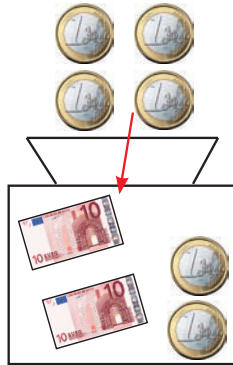


Rekenen met biljetten en munten

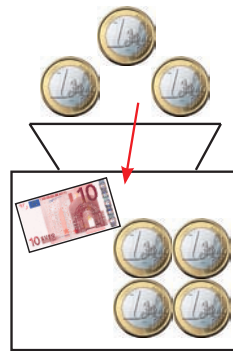
Optellen:



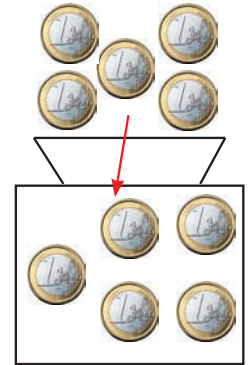
$12 + 3 = \underline{\quad}$



$22 + 4 = \underline{\quad}$



$14 + 3 = \underline{\quad}$



$5 + 5 = \underline{\quad}$

Bij de kassa wisselgeld terugkrijgen:



€ 5



Hannes betaalt met:



Hij krijgt terug:

$10 - \underline{\quad} = 5$



€ 16



Leni betaalt met:



Ze krijgt terug:

$20 - \underline{\quad} = 16$



€ 23



Maxi betaalt met:



Hij krijgt terug:

$30 - \underline{\quad} = 23$